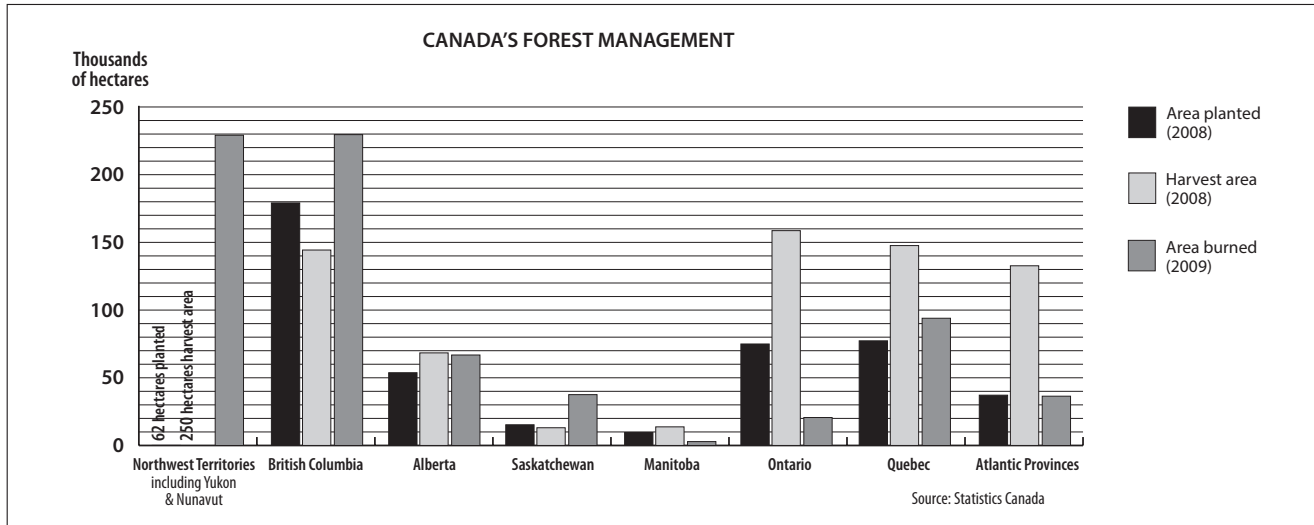


Read the selection below and answer the questions in *Answer Booklet 2*.

Canada's Forests

Canada is the world's leading exporter of softwood lumber, panels, pulp and newsprint, and the third largest exporter of printing and writing paper. Canada's forest management includes sustainable harvesting of forests, replanting of harvested areas and tracking threats to forests, including damage due to fires.

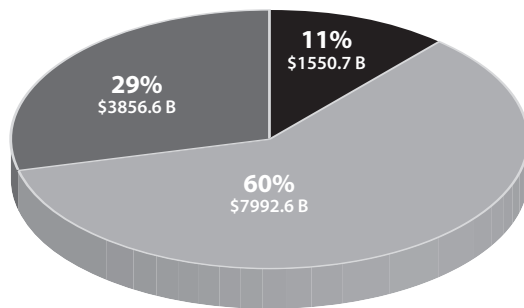


Ontario's Forest Industry

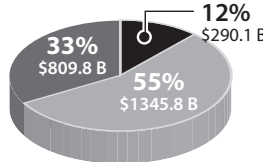
Ontario's forest industry contributes substantially to the provincial economy. The three major sectors of the forest industry in Ontario are represented in the pie graphs below.



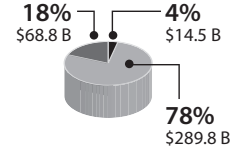
REVENUE FROM ONTARIO'S FOREST-INDUSTRY-MANUFACTURED GOODS
\$13.4 trillion (2008)



WAGES AND SALARIES IN ONTARIO'S FOREST INDUSTRY
\$2.446 trillion (2008)



NEW INVESTMENTS IN ONTARIO'S FOREST INDUSTRY
\$373 billion (2009)



Main sectors of the forest industry:

- Forestry and logging
- Pulp and paper product manufacturing
- Wood product manufacturing

Provide your answers in *Answer Booklet 2*.

Multiple-Choice Questions

- 1** What word is closest in meaning to “exporter” as used in the paragraph below the title?
- A investor
 - B purchaser
 - C distributor
 - D manufacturer
- 2** Why is a bar graph appropriate for the forest management data?
- F It shows decreasing size.
 - G It shows changes over time.
 - H It shows increasing importance.
 - J It shows a comparison of categories.
- 3** How is the “Canada’s Forest Management” graph organized?
- A by degree of success
 - B by size of production
 - C by changes over time
 - D by geographic location
- 4** What was true about British Columbia’s forest management in 2008–2009?
- F Less area was burned than planted.
 - G More area was burned than planted.
 - H Less area was planted than harvested.
 - J More area was harvested than burned.
- 5** What is an accurate conclusion that can be drawn from the information in the pie charts?
- A Wood product manufacturing generated the largest percentage of revenue but the smallest percentage of wages in 2008.
 - B The percentages of revenue and those of wages and salaries from the major sectors of Ontario’s forest industry were similar in 2008.
 - C The largest percentage of wages came from pulp and paper product manufacturing in 2008, even though that sector generated the smallest amount of revenue in 2008.
 - D The smallest amount of money was invested in forestry and logging in 2009, even though that sector generated the largest amount of revenue in 2008.
- 6** What conclusion can be supported by information in this selection?
- F The forest management of each region or province is unique.
 - G It is likely that Alberta’s forest industry is similar to that of Ontario.
 - H The pie charts suggest that forestry and logging in Ontario is the most profitable sector.
 - J Manitoba’s forest industry determines Canada’s international position as an exporter of forest products.